

Section 3: Measurement and Geometry

Fill in the boxes

				
Name of the shape	sphere	pyramid	square	rectangle
How many faces?	1	5	6	6
How many vertices?	0	5	8	8

Circle your answer.



Which shape has 5 faces?

A B C D

Which shapes have 5 vertices?

A B C D

Which shapes have 8 vertices?









A B C D

Which shapes have 0 vertices?

A B C D

Student Exercise: Solid and Plane Shapes

Put a cross in the box to show which shape is a solid and which is a plane.

								
Solid	X			X	X			X
Plane		X	X			X	X	