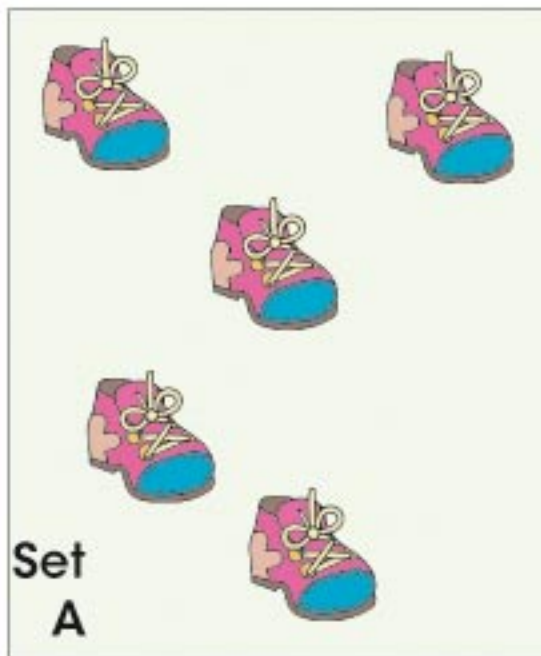


Section 1: *Number Sense***Student Exercise:** (*numbers up to 5*)
Different Arrangements

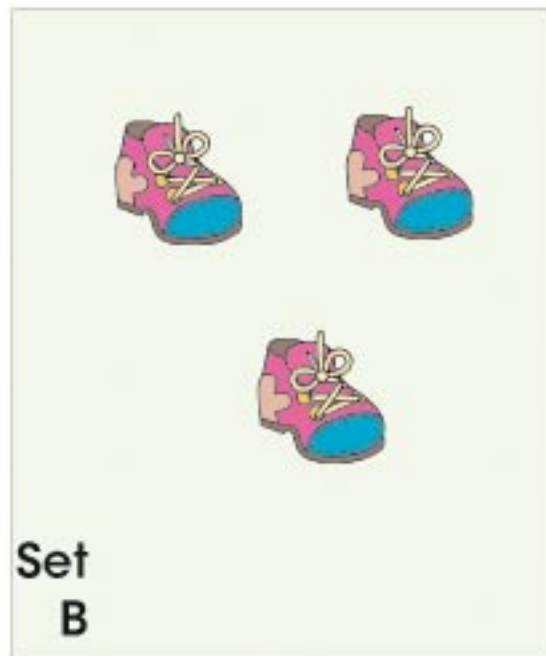

How many shoes are in this set?

**Answer:** 5

Which set has more?

Which set has less?

How many shoes are in this set?

**Answer:** 3**Answer:** A**Answer:** B**Teacher Tip** 

Students are asked to recognize the number in a set with randomly spaced objects. This will demonstrate an understanding that the look of a set may vary.